



# U.S. National Parks & Historic Places

Puzzles,  
Games & Quizzes

Copyright © 2015 by Bonnie Rose Hudson

All Rights Reserved. This book may not be reproduced or transmitted by any means, including graphic, electronic, or mechanical, without the express written consent of the author except in the case of brief quotations embodied in critical articles and reviews and those uses expressly described in the following Terms of Use. You are welcome to link back to the author's website, <http://writebonnierose.com>, but may not link directly to the PDF file. You may not alter this work, sell or distribute it in any way, host this file on your own website, or upload it to a shared website.

Terms of Use: For use by a family, this unit can be printed and copied as many times as needed. Classroom teachers may reproduce one copy for each student in his or her class. Members of co-ops or workshops may reproduce one copy for up to fifteen children. This material cannot be resold or used in any way for commercial purposes. Please contact the publisher with any questions.

# U.S. National Parks and Historic Places Puzzles, Games, and Quizzes

## Table of Contents

Choose the State.....	4
What Year Was That? .....	5
Decoding the States .....	6
Wars in American History.....	8
Historic Word Search.....	9
Choose the Site.....	10
Where Would You Be? .....	11
Decode the Historic Place .....	12
Choose the Historic Person .....	14
What Do You Know?.....	15
Historic Tiles.....	17
Which Fort Was It?.....	18
How Tall?.....	20
Sense of Direction.....	22
Choose the Historic Person, Part Two .....	24
Find the State Letter By Letter .....	25
Preserving the Past .....	34
50-State Crossword Puzzle.....	35
Notebooking Pages to use on your next vacation or for more research .....	37
Answer Key.....	41

## Choose the State

Choose what park, monument, site, or battlefield is in each state. Write the correct letter beside each number.

- |       |     |                |     |  |
|-------|-----|----------------|-----|--|
| _____ | 1.  | Alabama        | a.  | Abraham Lincoln Birthplace National Historic Park                              |
| _____ | 2.  | Alaska         | b.  | Acadia National Park   |
| _____ | 3.  | Arizona        | c.  | Agate Fossil Beds National Monument  |
| _____ | 4.  | Arkansas       | d.  | Andrew Johnson National Historic Site  |
| _____ | 5.  | California     | e.  | Arches National Park   |
| _____ | 6.  | Colorado       | f.  | Badlands National Park   |
| _____ | 7.  | Connecticut    | g.  | Brices Cross Roads National Battlefield  |
| _____ | 8.  | Delaware       | h.  | Carlsbad Caverns National Park   |
| _____ | 9.  | Florida        | i.  | Clara Barton National Historic Site  |
| _____ | 10. | Georgia        | j.  | Cowpens National Battlefield   |
| _____ | 11. | Hawaii         | k.  | Crater Lake National Park  |
| _____ | 12. | Idaho          | l.  | Craters of the Moon National Monument  |
| _____ | 13. | Illinois       | m.  | Dayton Aviation Heritage National Historic Park                                |
| _____ | 14. | Indiana        | n.  | Dry Tortugas National Park   |
| _____ | 15. | Iowa           | o.  | Eisenhower National Historic Site  |
| _____ | 16. | Kansas         | p.  | Fort Larned National Historic Site   |
| _____ | 17. | Kentucky       | q.  | Glacier National Park  |
| _____ | 18. | Louisiana      | r.  | Grand Portage National Monument  |
| _____ | 19. | Maine          | s.  | Grand Teton National Park  |
| _____ | 20. | Maryland       | t.  | Great Basin National Park  |
| _____ | 21. | Massachusetts  | u.  | Guadalupe Mountains National Park  |
| _____ | 22. | Michigan       | v.  | Haleakala National Park  |
| _____ | 23. | Minnesota      | w.  | Herbert Hoover National Historic Site  |
| _____ | 24. | Mississippi    | x.  | Horseshoe Bend National Historic Park  |
| _____ | 25. | Missouri       | y.  | Hot Springs National Park  |
| _____ | 26. | Montana        | z.  | Jean Lafitte National Historic Park  |
| _____ | 27. | Nebraska       | aa. | Kenai Fjords National Park   |
| _____ | 28. | Nevada         | bb. | Kennesaw Mountain National Battlefield   |
| _____ | 29. | New Hampshire  | cc. | Lassen Volcanic National Park  |
| _____ | 30. | New Jersey     | dd. | Lincoln Boyhood National Memorial  |
| _____ | 31. | New Mexico     | ee. | Lincoln Home National Historic Site  |
| _____ | 32. | New York       | ff. | Manassas National Battlefield  |
| _____ | 33. | North Carolina | gg. | Marsh-Billings-Rockefeller National Historic Park                              |
| _____ | 34. | North Dakota   | hh. | Martin Van Buren National Historic Site  |
| _____ | 35. | Ohio           | ii. | Mesa Verde National Park   |
| _____ | 36. | Oklahoma       | jj. | Minute Man National Historic Park  |
| _____ | 37. | Oregon         | kk. | Mount Rainier National Park  |
| _____ | 38. | Pennsylvania   | ll. | Namur Historic District  |
| _____ | 39. | Rhode Island   | mm. | New Castle Court House Museum (part of the First State National Historic Park) |
| _____ | 40. | South Carolina | nn. | Petrified Forest National Park   |
| _____ | 41. | South Dakota   | oo. | River Raisin National Battlefield  |
| _____ | 42. | Tennessee      | pp. | Roger Williams National Memorial   |
| _____ | 43. | Texas          | qq. | Saint-Gaudens National Historic Site   |
| _____ | 44. | Utah           | rr. | Theodore Roosevelt National Park   |
| _____ | 45. | Vermont        | ss. | Thomas Edison National Historic Park   |
| _____ | 46. | Virginia       | tt. | Ulysses S. Grant National Historic Site  |
| _____ | 47. | Washington     | uu. | Washita Battlefield National Historic Site                                     |
| _____ | 48. | West Virginia  | vv. | Weir Farm National Historic Site   |
| _____ | 49. | Wisconsin      | ww. | West Virginia Independence Hall National Historic Landmark                     |
| _____ | 50. | Wyoming        | xx. | Wright Brothers National Memorial  |

## What Year Was That?

Choose the correct date from the bank of years below; write the correct year beside each fact.

- \_\_\_\_\_ 1. The Golden Gate National Recreation Area in San Francisco and the Gateway National Recreation Area in New York are established
- \_\_\_\_\_ 2. The first national recreation area, Lake Mead, is established.
- \_\_\_\_\_ 3. The Martin Luther King, Jr. National Memorial is dedicated on August 28.
- \_\_\_\_\_ 4. Gettysburg National Military Park is established.
- \_\_\_\_\_ 5. The Yellowstone region is explored by the Hayden Survey expedition.
- \_\_\_\_\_ 6. Chimney Rock is established as a National Historic Site.
- \_\_\_\_\_ 7. The Statute of Liberty is designated a national monument.
- \_\_\_\_\_ 8. The National World War II Memorial is dedicated.
- \_\_\_\_\_ 9. The Antiquities Act is signed by President Theodore Roosevelt, allowing presidents to designate national monuments. Devil's Tower becomes the first.
- \_\_\_\_\_ 10. The first national heritage area is established.
- \_\_\_\_\_ 11. Crater Lake National Park is founded.
- \_\_\_\_\_ 12. Yellowstone National Park is created, the first national park.
- \_\_\_\_\_ 13. Carlsbad Caverns National Park is created.
- \_\_\_\_\_ 14. The National Park System is more than doubled by the adding of 47 million acres in Alaska as a result of the Alaska National Interest Lands Conservation Act.
- \_\_\_\_\_ 15. The Colorado National Monument is established by President Taft.
- \_\_\_\_\_ 16. The first National Military Parks, Chickamauga and Chattanooga, are established. Yosemite National Park established.
- \_\_\_\_\_ 17. The National Park Service is established.
- \_\_\_\_\_ 18. The first national seashore, Cape Hatteras, is established.
- \_\_\_\_\_ 19. The Flight 93 National Memorial is authorized.
- \_\_\_\_\_ 20. Scott's Bluff National Monument is established.
- \_\_\_\_\_ 21. Washita Battlefield National Historic site is established on November 12.

1871

1916

1972

1872

1919

1980

1890

1924

1984

1895

1930

1996

1902

1936

2002

1906

1937

2004

1911

1956

2011

## Decoding the States

Below you will see the names of historic places. Beneath each one are blanks that need to be filled in to find out what state the places are in. Under some of the blanks are numbers that represent letters in the name of the historic place. Find that letter in the name of the historic place and fill in the blank. When you have filled in everything that has a clue, see if you can fill in the rest of the letters to find out what state the historic place is in. The first one is done for you.

### 1. Allegheny Portage Railroad National Historic Site

\_\_\_\_\_ 10 \_\_\_\_\_ 8 \_\_\_\_\_ \_\_\_\_\_ 9 2 \_\_\_\_\_ \_\_\_\_\_ \_\_\_\_\_ 19 \_\_\_\_\_

The tenth letter in Allegheny Portage Railroad National Historic Site is "p," so you will write the letter "p" in the blank above the ten. Now move on to the next clues: the eighth letter is "n;" the ninth letter is "y;" the second letter is "l;" and the nineteenth letter is "i." Write those letters above the blanks with clues. Can you figure out the name of the state?

P \_\_\_\_\_ n \_\_\_\_\_ y l \_\_\_\_\_ i \_\_\_\_\_

Correct—the state is Pennsylvania!

### 2. Minuteman Missile National Historic Site

\_\_\_\_\_ 12 \_\_\_\_\_ 4 \_\_\_\_\_ \_\_\_\_\_ \_\_\_\_\_ 8 \_\_\_\_\_ \_\_\_\_\_ \_\_\_\_\_ 5 8

### 3. Natural Bridges National Monument

\_\_\_\_\_ 3 6 \_\_\_\_\_

### 4. Carl Sandburg Home National Historic Site

\_\_\_\_\_ 14 3 \_\_\_\_\_ \_\_\_\_\_ \_\_\_\_\_ 2 \_\_\_\_\_ \_\_\_\_\_ 4 \_\_\_\_\_ 7 \_\_\_\_\_

### 5. Namur Historic District

\_\_\_\_\_ 7 \_\_\_\_\_ 13 \_\_\_\_\_ 1 8 \_\_\_\_\_ \_\_\_\_\_

### 6. San Juan Island National Historical Park

\_\_\_\_\_ 2 \_\_\_\_\_ \_\_\_\_\_ 8 3 \_\_\_\_\_ 16 \_\_\_\_\_ 7

7. Arlington House, The Robert E. Lee Memorial

—  $\frac{4}{2}$  — —  $\frac{5}{1}$  —

8. Sitka National Historical Park

—  $\frac{13}{5}$  — —  $\frac{4}{7}$  —

9. Fort Caroline National Memorial

$\frac{1}{8}$  — —  $\frac{10}{6}$  —

10. Lincoln Home National Historic Site

—  $\frac{1}{2}$  —  $\frac{7}{5}$  — —

11. Nicodemus National Historic Site

—  $\frac{11}{1}$  —  $\frac{20}{9}$  —

12. Boston African American National Historic Site

—  $\frac{7}{3}$  — —  $\frac{12}{11}$  — — —  $\frac{16}{4}$   $\frac{24}{24}$  —

13. Chimney Rock National Historic Site

$\frac{5}{8}$  — —  $\frac{13}{22}$   $\frac{11}{11}$  —

14. Paterson Great Falls National Historic Park

$\frac{8}{4}$  — — —  $\frac{11}{5}$   $\frac{6}{6}$  — —

# Wars in American History

Choose what site belongs to which war and write the name of the war beside the correct sites. Each war listed will be used multiple times.

World War II

Civil War

Revolutionary War

- \_\_\_\_\_ 1. Appomattox Court House National Historic Park
- \_\_\_\_\_ 2. Minidoka National Historic Site
- \_\_\_\_\_ 3. Morristown National Historic Park
- \_\_\_\_\_ 4. Ford's Theatre National Historic Site
- \_\_\_\_\_ 5. Rosie the Riveter \_\_\_\_\_ Home Front National Historic Park
- \_\_\_\_\_ 6. Independence National Historical Park
- \_\_\_\_\_ 7. Tuskegee Army Airfield National Historic Site
- \_\_\_\_\_ 8. Antietam National Battlefield
- \_\_\_\_\_ 9. Clara Barton National Historic Site
- \_\_\_\_\_ 10. Valley Forge National Historical Park
- \_\_\_\_\_ 11. USS Arizona Memorial
- \_\_\_\_\_ 12. Brices Cross Roads National Battlefield
- \_\_\_\_\_ 13. American Memorial Park
- \_\_\_\_\_ 14. Kennesaw Mountain National Battlefield Park
- \_\_\_\_\_ 15. Manzanar National Historic Site



## Historic Word Search

Below is a word search that allows you to search for names of the parks, monuments, sites, etc. that are listed below the puzzle. Have fun!

e e s u o h a c c u y y e t n o e o u e n d o i a c b r l a r e c e m p i s  
 o t m k n p w n t y i w r c h e l y l t h a a o a i w a r o g g m g m e a y  
 e t n i a t n u o m y k c o r y h m m v i e z a o i i a y l w o a u e e s  
 a i t e t e n l h y a o b r m n o a a m t m t w n a s o r y h e h n n w c d  
 y f s c z i r m e r n a o p e r l l n r l e e d l a s s e n v o l c a n i c  
 o a v e h p r b i e o a i a r v a y o n c k c c u y a h o g a v a l l e y a  
 s l r e n i e a r n s c c o m l u d c l e a r g h o n s n e v b a t m v e b  
 e n g e r h c r m a i e w n l a p o l l v l u m l t d a m y r m r e i o l r  
 m a e n d m o k c m d d f o r t n e c e s s i t y o s o t i o h e l n h l y  
 i e n v c w o w a e e e o o a o l z o n i w n s o n a c l o v n i l u p a c  
 t j o n e d o l e m s l c k b a h p a r a f s w l b e l n s n m l i t e v e  
 e a t v d t n o t r a b a r a l e g o n a v g r o a o n l r n n e s e l h c  
 r s s o r s s s d n m u t s o p g n i d a r t n o i n u t r o f d i m m t a  
 a a w c h a t t a n o o g a a e w s n b e r l r i d o d p r v l n s a a a n  
 k a o i g r t s r t h c h a c o c u l t u r e n o r s u s e i r a l n l e y  
 n r l v r c l a f o t h a r r y s t r u m a n n o f p f e f c l b a m p d o  
 n i l p a h c t r o f c o k d e i a p m y o k e n n e s a w m o u n t a i n  
 o g e o u e m s a e u l s e d a c s a c h t r o n n r n h e i c s d v i y v  
 s n y a s s c h a i u n s h s c i n p l a c a b n k l n r h e c a n r s n h

Chickamauga	Thomas Edison	Bryce Canyon	El Malpais	Cuyahoga Valley
Chattanooga	Ellis Island	Cedar Breaks	El Morrow	Fort Union Trading Post
Manzanar	Eisenhower	Hovenweep	Pecos	Kennesaw Mountain
Yosemite	Fort Necessity	Minute Man	Wind Cave	Carter G Woodson Home
Death Valley	Rocky Mountain	Lassen Volcanic	Lake Mead	Salem Maritime
Redwood	North Cascades	Yucca House	Olympic	Saugus Iron Works
Fort Stevens	Bighorn Canyon	Aztec Ruins	Alamo	Springfield Armory
Fort Chaplin	Nez Perce	Channel Islands	Cabrillo	Fort Vancouver
Minidoka	Yellowstone	Capulin Volcano	Lowell	Clara Barton
Jean Lafitte	Arches	Chaco Culture	Bandelier	Harry S Truman

## Choose the Site

Choose from the list of parks and sites below and write the letter of the park or site where you would find each location:

- \_\_\_\_\_ 1. The Lemon House and the Staple Bend Tunnel
  - \_\_\_\_\_ 2. Brown's Ferry Federal Railroad, Signal Point, and Orchard Knob
  - \_\_\_\_\_ 3. Awatixa Xi'e Village, Awatixa Village, and Hidatsa Village
  - \_\_\_\_\_ 4. McLean House, Clover Hill Tavern, and the Plunkett-Meeks Store
  - \_\_\_\_\_ 5. Scotty's Castle, Furnace Creek Inn, Harmony Borax Works, Keane Wonder Mine, Rhyolite Ghost Town, and the Wildrose Charcoal Kilns
  - \_\_\_\_\_ 6. Beaver Marsh, Brandywine Falls, Canal Exploration Center, Everett Covered Bridge, Frazee House, Jaite Mill, Ritchie Ledges, Stanford House, and the Wilson Feed Mill
  - \_\_\_\_\_ 7. Wawona Hotel and Thomas Hill Studio, LeConte Memorial Lodge, Parsons Memorial Lodge, Rangers' Club, and the Ahwahnee Hotel
  - \_\_\_\_\_ 8. Gibbon Falls, Lewis Falls, and Mammoth Hot Springs
  - \_\_\_\_\_ 9. Elkhorn Ranch Site, Maltese Cross Cabin, Long X Trail, and the Peaceful Valley Ranch
  - \_\_\_\_\_ 10. John Young Homestead
- 
- a. Allegheny Portage Railroad National Historic Site, Pennsylvania
  - b. Appomattox Court House National Historic Park, Virginia
  - c. Chickamauga and Chattanooga National Military Park, Georgia and Tennessee
  - d. Cuyahoga Valley National Park, Ohio
  - e. Death Valley National Park, California and Nevada
  - f. Knife River Indian Villages National Historic Site, North Dakota
  - g. Pu'ukohola Heiau National Historic Site, Hawaii
  - h. Theodore Roosevelt National Park, North Dakota
  - i. Yellowstone National Park, Idaho, Montana, and Wyoming
  - j. Yosemite National Park, California

## Where Would You Be?

Circle the correct location that answers each question.

1. Where would you be if you wanted to visit the National Historic Site of San Juan?  
a. Florida                                      b. Puerto Rico                                      c. Virgin Islands
2. Where would you be if you wanted to visit the Lincoln Home National Historic Site?  
a. Illinois                                      b. Indiana                                      c. Kentucky
3. Where would you be if you wanted to visit the Kalaupapa National Park?  
a. American Samoa                                      b. Hawaii                                      c. Guam
4. Where would you be if you wanted to visit the Natural Bridges National Monument?  
a. Virginia                                      b. Idaho                                      c. Utah
5. Where would you be if you wanted to visit the Perry's Victory & International Peace National Memorial?  
a. Texas                                      b. Maine                                      c. Ohio
6. Where would you be if you wanted to visit Great Falls National Park?  
a. Virginia                                      b. New York                                      c. Idaho
7. Where would you be if you wanted to visit the National Monument of Buck Island Reef?  
a. Hawaii                                      b. American Samoa                                      c. Virgin Islands
8. Where would you be if you wanted to visit Fossil Butte National Monument?  
a. Nevada                                      b. Wyoming                                      c. Colorado
9. Where would you be if you wanted to visit Cape Krusenstern National Monument?  
a. Alaska                                      b. Maine                                      c. North Carolina
10. Where would you be if you wanted to visit Rosie the Riveter World War II Home Front National Historic Park?  
a. California                                      b. Hawaii                                      c. Washington D.C.

## Decode the Historic Place

Use the graph below to help decode the names of the historic places. Follow the directions for finding each letter. For example, if the directions say Across 4, Down 3, (A4-D3) you would follow the Down row 3 over to Across column 4 and find the letter e. In the instructions, we will use A for Across and D for Down.

		Across				
		1	2	3	4	5
Down	1	z	d	i	w	x
	2	u	l	y	n	p
	3	k	q	o	e	m
	4	t	v	h	c	r
	5	g	a	f	b	s

1. \_\_\_\_\_ Caverns National Park,  
 A4-D4 A2-D5 A5-D4 A2-D2 A5-D5 A4-D5 A2-D5 A2-D1 New Mexico
2. \_\_\_\_\_ Roosevelt National Park,  
 A1-D4 A3-D4 A4-D3 A3-D3 A2-D1 A3-D3 A5-D4 A4-D3 North Dakota
3. Touro \_\_\_\_\_ National Historic Site,  
 A5-D5 A3-D2 A4-D2 A2-D5 A1-D5 A3-D3 A1-D5 A1-D2 A4-D3 Rhode Island
4. Marsh- \_\_\_\_\_ -Rockefeller National Historic  
 A4-D5 A3-D1 A2-D2 A2-D2 A3-D1 A4-D2 A1-D5 A5-D5 Park, Vermont
5. \_\_\_\_\_ National Heritage Area,  
 A4-D4 A3-D3 A2-D5 A2-D2 West Virginia
6. \_\_\_\_\_ National Battlefield,  
 A4-D4 A3-D3 A4-D1 A5-D2 A4-D3 A4-D2 A5-D5 South Carolina
7. \_\_\_\_\_ National Monument,  
 A4-D4 A3-D4 A3-D1 A5-D4 A3-D1 A4-D4 A2-D5 A3-D4 A1-D2 A2-D5 Arizona
8. Saint- \_\_\_\_\_ National Historic Site,  
 A1-D5 A2-D5 A1-D2 A2-D1 A4-D3 A4-D2 A5-D5 New Hampshire
9. \_\_\_\_\_ Deane House National Historic Landmark,  
 A5-D5 A3-D1 A2-D2 A2-D5 A5-D5 Connecticut
10. \_\_\_\_\_ Bend National Military  
 A3-D4 A3-D3 A5-D4 A5-D5 A4-D3 A5-D5 A3-D4 A3-D3 A4-D3 Park, Alabama

		Across				
		1	2	3	4	5
D o w n	1	z	d	i	w	x
	2	u	l	y	n	p
	3	k	q	o	e	m
	4	t	v	h	c	r
	5	g	a	f	b	s

11. \_\_\_\_\_ Raisin National Battlefield Park,  
A5-D4 A3-D1 A2-D4 A4-D3 A5-D4 Michigan
12. \_\_\_\_\_ Hoover National Historic Site,  
A3-D4 A4-D3 A5-D4 A4-D5 A4-D3 A5-D4 A1-D4 Iowa
13. \_\_\_\_\_ Post National Memorial,  
A2-D5 A5-D4 A1-D3 A2-D5 A4-D2 A5-D5 A2-D5 A5-D5 Arkansas
14. \_\_\_\_\_ State National Park,  
A3-D5 A3-D1 A5-D4 A5-D5 A1-D4 Delaware
15. \_\_\_\_\_ National Park,  
A2-D5 A4-D4 A2-D5 A2-D1 A3-D1 A2-D5 Maine
16. \_\_\_\_\_ National Park,  
A5-D3 A4-D3 A5-D5 A2-D5 A2-D4 A4-D3 A5-D4 A2-D1 A4-D3 Colorado
17. \_\_\_\_\_ National Battlefield,  
A2-D5 A4-D2 A1-D4 A3-D1 A4-D3 A1-D4 A2-D5 A5-D3 Maryland
18. \_\_\_\_\_ Cave National Park,  
A5-D3 A2-D5 A5-D3 A5-D3 A3-D3 A1-D4 A3-D4 Kentucky
19. Cane River \_\_\_\_\_ National Historical Park,  
A4-D4 A5-D4 A4-D3 A3-D3 A2-D2 A4-D3 Louisiana

## Choose the Historic Person

Match the person with the park they worked with and write the letter of the correct answers beside the numbers.

- |        |   |    |                      |
|--------|---|----|----------------------|
| ___1.  | First custodian of the Colorado National Monument   | a. | George Brunap        |
| ___2.  | First female custodian of a park in the National Park Service; first custodian of Capulin Volcano National Monument | b. | George B. Dorr       |
| ___3.  | Discovered the first dinosaur bones at Dinosaur National Monument   | c. | Earl Douglass        |
| ___4.  | Worked to create a park which is now Canyonlands National Park  | d. | Dr. Samuel George    |
| ___5.  | Finnish architect who designed the Gateway Arch at the Jefferson National Expansion Memorial                        | e. | George Bird Grinnell |
| ___6.  | Named Telescope Peak in Death Valley National Park  | f. | Jessie Foote Jack    |
| ___7.  | Known as the "father of Acadia National Park"   | g. | John Otto            |
| ___8.  | Chose where the French were going to settle in Florida (Fort Caroline National Memorial)                            | h. | Jean Ribault         |
| ___9.  | Designed the first plans for Meridian Hill Park   | i. | Eero Saarinen        |
| ___10. | Worked to create a park which is now Glacier National Park  | j. | Bates Wilson         |

## What Do You Know?

Each of the following statements is either true or false. Write "true" if the statement is true; write "false" if the statement is false. For added points, if the statement is false, rewrite the statement so that it is true.


1. The site of the surrender at the end of the Civil War took place at the McLean House in Appomattox Court House; the actual courthouse played no role in the surrender.
2. As of 2015, the Abraham Lincoln Birthplace National Historic Park in Kentucky is the newest memorial to honor Lincoln.
3. The site of George Washington's inauguration was Federal Hall in New York.
4. The most intact Civil War battlefield is the Pea Ridge Battlefield.
5. Fort Sackville was renamed Fort Patrick Henry after George Rogers Clark retook the fort during the Revolutionary War.
6. Kalaupapa National Park has more endangered plant and animal species than any other site in the National Park Service.
7. Cadillac Mountain, the highest peak on the Atlantic coast, is located in Acadia National Park.
8. The first National Monument was the Washington Monument.
9. Fort Scott National Historic Site represents the involvement of African Americans in westward expansion and in settling the Great Plains.
10. Camp David, the Presidential retreat, is located in Catoctin Mountain Park.

11. Mount St. Helens is the highest mountain on the continent.
12. The house that General George Washington used during the Siege of Boston during the Revolutionary War later belonged to Nathaniel Hawthorne.
13. Castle Clinton in New York was originally built to prevent a British invasion; it is now the ticket office for the Statue of Liberty.
14. The David Berger National Memorial honors David Berger, one of eleven Israeli athletes, and an American citizen, who was killed at the 1972 Olympic Games.
15. Glacier National Park was the fifteenth National Park.
16. With the creation of the First State National Park, all 50 states had a National Park unit in them.
17. The Dayton Aviation Heritage National Historic Park also includes the home of poet and author Paul Laurence Dunbar.
18. Crater Lake National Park gets an average of 533 inches of snow per year.
19. White Sands National Monument protects one of the largest petroglyph (rock carving) sites in North America.
20. The Spirit of Freedom Sculpture was sculpted by Ed Hamilton.



# Historic Tiles

Use the names of the national parks, monuments, etc. from the word box below to fill in the missing letters in this tile game. The words made with the tiles are only the words in **bold** from the word box.



- City of Rocks** National Reserve, Idaho
- Grand Portage** National Monument, Minnesota
- Great Basin** National Park, Nevada
- Glacier** National Park, Montana
- Federal Hall** National Monument, New York
- John Ericsson** National Memorial, Washington, D.C.
- Oregon Caves** National Monument and Preserve, Oregon
- San Antonio Missions** National Historical Park, Texas
- Haleakala** National Park, Hawaii
- Indiana Dunes** National Historic Site, Indiana
- First Ladies** National Historic Site, Ohio
- Fort Frederica** National Monument, Georgia
- Wilson's Creek** National Battlefield, Missouri
- Grand Teton** National Park, Wyoming
- Washita Battlefield** National Historic Site, Oklahoma
- Fort Point** National Historic Site, California
- Fort Donelson** National Battlefield, Tennessee
- Natchez** National Historical Park, Mississippi

## Which Fort Was It?

1. This military fort, which was the largest and best known fort on the Northern Plains, was originally established as a private fur trading fort.
  - a. Fort Foote
  - b. Fort Union
  - c. Fort Laramie
  
2. This fort was the site of the opening battle of the French and Indian War and the only time George Washington surrendered to the enemy.
  - a. Fort Necessity
  - b. Fort Washington
  - c. Fort Greble
  
3. This fort's involvement in history includes England's first settlements, Native American culture, and the Freedmen's colony from the Civil War period.
  - a. Fort Stanton
  - b. Fort Monroe
  - c. Fort Raleigh
  
4. This fort, along the Santa Fe Trail, was established to protect businesses and the military.
  - a. Fort Bowie
  - b. Fort Union
  - c. Fort Ricketts
  
5. This fort was built on a hill near Morristown, New Jersey, so it could be used during the Revolutionary War if the British attacked Morristown. It was never needed.
  - a. Fort Dupont
  - b. Fort Nonsense
  - c. Fort Bunker Hill
  
6. This fur trade post was the most important post located on the Upper Missouri River from 1828 to 1867.
  - a. Fort Union
  - b. Fort Davis
  - c. Fort Scott

7. This fort, which is one of the best preserved forts of its time, first served to protect the mail. Later, it protected the Santa Fe Trail, and ended when the railroad was completed.
- a. Fort Reno                      b. Fort Chaplin                      c. Fort Larned
8. This fort was established by James Oglethorpe in an attempt to keep the southern part of Georgia British and to protect the colony from the Spanish in Florida.
- a. Fort Pulaski                      b. Fort Frederica                      c. Fort Mahan
9. This fort was built by the French to stake a claim in North America.
- a. Fort Caroline                      b. Fort Matanzas                      c. Fort Miamis
10. This fort protected San Francisco Harbor from Confederate or foreign attack, during and after the Civil War.
- a. Fort Stanwix                      b. Fort Marcy                      c. Fort Point
11. This fort was where the Civil War began.
- a. Fort Sumter                      b. Fort Donelson                      c. Fort McHenry
12. This fort never saw battle, but it was where runaway slaves found safety before continuing into Washington, D.C.
- a. Fort Bayard                      b. Fort Dupont                      c. Fort Jackson

## How Tall?

Can you do the math to figure out how tall the following are?

### 1. Gateway Arch at the Jefferson National Expansion Memorial

There are 5,280 feet in a mile. The Gateway Arch at the Jefferson National Expansion Memorial is less than one-eighth of this amount. Figure out the number of feet in one-eighth of a mile, then subtract 30 feet from your answer to discover the height of the Gateway Arch at the Jefferson National Expansion Memorial.

### 2. Pennsylvania Monument at Gettysburg

The Pennsylvania Monument at Gettysburg is equal in height to 1,320 inches. How many feet tall is it?

### 3. Perry's Victory and International Peace Memorial

If the living room in your house was 16 feet wide, you would have to put 22 of them side by side to see how tall Perry's Victory and International Peace Memorial is. How tall is it?

### 4. Washington Monument

If John is 5 feet tall, his younger sister Susan is  $4\frac{1}{2}$  feet tall, and his little brother Jim is 3 feet tall, how tall is the Washington Monument if you would have to stand 50 Susans on top of each other, then add 25 Jims on top of each other, and finally add 51 Johns on top of each other to equal the height of the Washington Monument?

### 5. Mount Rainier

There are 5,280 feet in a mile. There are 12 inches in a foot. How many feet tall is Mount Rainier if it is equal to 2 miles and 46,200 inches? (Remember to convert all your measurements to feet!)

## 6. United States National Memorial Arch at Valley Forge

There are 3 feet in a yard. There are 12 inches in a foot. If the United States National Memorial Arch at Valley Forge is 17 yards and 108 inches high, how tall is it in feet?

## 7. Statue of Liberty

If the Statue of Liberty was standing on a mountain that was 2 miles high, how tall would the Statue of Liberty be if the total height of the mountain and the statue together was 10,865 feet?

## 8. Bunker Hill Monument in Boston

Mike's dog is 12 inches tall. Karen's cat is 8 inches tall. Jeremy's gerbil is 4 inches tall. How tall would the Bunker Hill Monument be if you if you would have to stand 100 of Mike's dogs on top of each other, then add 150 of Karen's cats on top of each other, and finally add 63 of Jeremy's gerbils on top of each other to equal the height of the Bunker Hill Monument? Give your answer in feet.

## 9. San Jacinto Monument

Joe is building a replica of the San Jacinto Monument for a history project. He wanted to build his replica  $\frac{1}{30}$  the size of the real monument, but found out that would still be too high. He decided to build it  $\frac{1}{2}$  the size he originally planned. If his replica will be  $9\frac{1}{2}$  feet tall when he is finished, how tall is the real San Jacinto Monument?

## 10. Mount McKinley

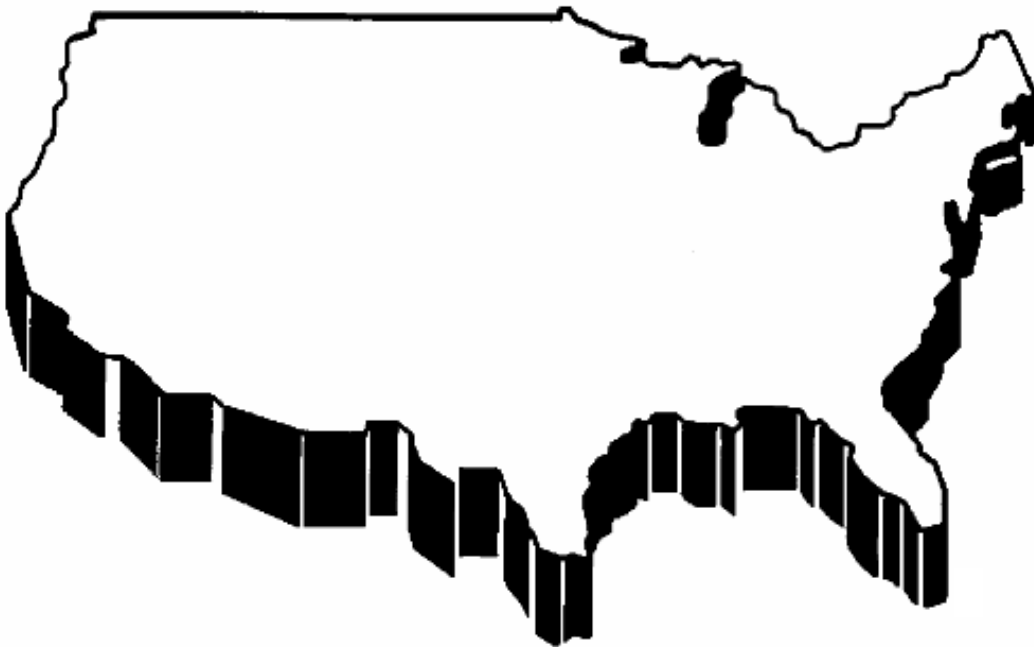
If there are 5,280 feet in a mile, and if Mount McKinley is 9,600 inches less than 4 miles high, what is the height of Mount McKinley (in feet)?

## Sense of Direction

Imagine you are traveling. Put these parks in order, according to the directions given in the instructions. Label the first location 1, the second location 2, and the third location 3.

1. Going north to south
  - \_\_\_\_\_ a. Pullman National Monument
  - \_\_\_\_\_ b. Horseshoe Bend National Military Park
  - \_\_\_\_\_ c. Fort Donelson National Battlefield
2. Going east to west
  - \_\_\_\_\_ a. Chamizal National Memorial
  - \_\_\_\_\_ b. Castillo De San Marcos National Monument
  - \_\_\_\_\_ c. Joshua Tree National Park
3. Going northwest to southeast
  - \_\_\_\_\_ a. Charles Pickney National Historic Site
  - \_\_\_\_\_ b. Homestead National Monument
  - \_\_\_\_\_ c. Olympic National Park
4. Going south to north
  - \_\_\_\_\_ a. Gettysburg National Military Park
  - \_\_\_\_\_ b. Fredericksburg and Spotsylvania National Military Park
  - \_\_\_\_\_ c. Ford's Theatre
5. Going northeast to southwest
  - \_\_\_\_\_ a. Black Canyon of the Gunnison National Park
  - \_\_\_\_\_ b. Coronado National Memorial
  - \_\_\_\_\_ c. Theodore Roosevelt Birthplace National Historic Site
6. Going west to east
  - \_\_\_\_\_ a. Craters of the Moon National Monument
  - \_\_\_\_\_ b. Mammoth Cave National Park
  - \_\_\_\_\_ c. George Washington Carver National Monument
7. Going southeast to northwest
  - \_\_\_\_\_ a. Andersonville National Historic Site
  - \_\_\_\_\_ b. Badlands National Park
  - \_\_\_\_\_ c. Little Bighorn National Battlefield

8. Going north to south
- \_\_\_\_\_ a. Aleutian World War II National Historic Area
  - \_\_\_\_\_ b. Honouliuli National Monument
  - \_\_\_\_\_ c. Mount Rainer National Park
9. Going southwest to northeast
- \_\_\_\_\_ a. Marsh-Billings-Rockefeller National Historic Park
  - \_\_\_\_\_ b. Carlsbad Caverns National Park
  - \_\_\_\_\_ c. George Rogers Clark National Historic Park
10. Going east to west
- \_\_\_\_\_ a. Charles Young Buffalo Soldiers National Monument
  - \_\_\_\_\_ b. Crater Lake National Park
  - \_\_\_\_\_ c. Minute Man National Historic Park



## Choose the Historic Person, Part Two

Which person could you learn about at each park?

- |          |  |                            |
|----------|--|----------------------------|
| _____1.  | The Alamo National Historic Landmark, Texas                              | a. Gutzon Borglum          |
| _____2.  | Dayton Aviation Heritage National Historic Park, Ohio                    | b. Gen. Charles Cornwallis |
| _____3.  | Ellis Island (part of the Statue of Liberty National Monument, New York) | c. Davy Crockett           |
| _____4.  | Ford's Theatre National Historic Site, District of Columbia              | d. Gen. George A. Custer   |
| _____5.  | Friendship Hill National Historic Site, Pennsylvania                     | e. Albert Gallatin         |
| _____6.  | Gettysburg National Military Park, Pennsylvania                          | f. Gen. Ulysses S. Grant   |
| _____7.  | Guilford Courthouse National Military Park, North Carolina               | g. Bob Hope                |
| _____8.  | Kalaupapa National Park, Hawaii  | h. King Kamehameha V       |
| _____9.  | Mount Rushmore National Memorial, South Dakota (designer)                | i. Gen. Robert E. Lee      |
| _____10. | Tuskegee Institute National Historic Site, Alabama                       | j. Abraham Lincoln         |
| _____11. | Valley Forge National Historic Park, Pennsylvania                        | k. Gen. Nathaniel Lyon     |
| _____12. | Vicksburg National Military Park, Mississippi                            | l. Booker T. Washington    |
| _____13. | Washita Battlefield National Historic Site, Oklahoma                     | m. George Washington       |
| _____14. | Wilson's Creek National Battlefield, Missouri                            | n. Wright Brothers         |



## Find the State Letter by Letter

Use the letters from the statement below the name of the park or monument to find the name of the state that it is located in. If you can make the name of more than one state from the letters, choose the state that you think is correct for that park or monument. The first one is done for you.

1. Gettysburg National Military Park

**Please** visit us **in** Gettysburg **again** soon.

The first step is to think of the state where you *think* you can find Gettysburg National Military Park. Did *Pennsylvania* come to mind? See if you can find all the letters in Pennsylvania in the clue in the second line. Correct!

2. Pea Ridge National Military Park

This park has the Civil War battlefield that has been kept the most intact in the United States.

What state is Pea Ridge National Military Park located in?

3. Andersonville National Historic Site

The National Prisoner of War Museum is located in Andersonville, reminding us of our obligation to give our gratitude to these brave people.

What state is Andersonville National Historic Site located in?

4. Castillo De San Marcos National Monument

Visit the only seventeenth-century military fort in the United States.

What state is Castillo De San Marcos National Monument located in?

5. George Rogers Clark National Historic Park

Visit the monument and remember the recapture of Fort Sackville from the British on February 25, 1779.

What state is George Rogers Clark National Historic Park located in?

6. Jean Lafitte National Historical Park and Preserve

This park and preserve contains the Chalmette Battlefield, important in the War of 1812.

What state is Jean Lafitte National Historical Park and Preserve located in?

7. Fort Larned National Historic Site

Fort Larned's mission began as a way to keep the mail safe and grew into a mission to protect the Santa Fe Trail.

What state is Fort Larned National Historic Site located in?

8. Acadia National Park

Don't miss Cadillac Mountain and the beautiful stone bridges on your next trip to Acadia National Park.

What state is Acadia National Park located in?

9. Herbert Hoover National Historic Site

See the place where the thirty-first president of the United States was born.

What state is the Herbert Hoover National Historic Site located in?

10. Haleakala National Park

Why not visit Haleakala on your next visit to this island state?

What state is Haleakala National Park located in?

11. Fort Point National Historic Site

See Fort Point, overlooking a beautiful bridge, on the western coast of the United States.

What state is Fort Point National Historic Site located in?

12. Denali National Park and Preserve

Don't miss the highest mountain on the North American continent when you visit this park.

What state is Denali National Park and Preserve located in?

13. Federal Hall National Monument

You will want to see the site of George Washington's inauguration at this national monument when you visit.

What state is the Federal Hall National Monument located in?

14. Abraham Lincoln Birthplace National Historical Park

You will want to see the park that was the first memorial to President Abraham Lincoln.

What state is the Abraham Lincoln Birthplace National Historical Park located in?

15. Fort Sumter National Monument

Thinking of the years of fighting that followed the fighting at Fort Sumter is even more meaningful when you see the actual monument.

What the state is the Fort Sumter National Monument located in?

16. Devil's Tower National Monument

What an amazing geologic feature you will see at Devil's Tower in the Black Hills.

What state is Devil's Tower National Monument located in?

17. Bent's Old Fort National Historic Site

Come and see Bent's Old Fort that was built in order to trade with trappers and the Indians, but was abandoned in 1849.

What state is Bent's Old Fort National Historic Site located in?

18. Montezuma Castle National Monument

Please hurry back to visit the Montezuma Castle National Monument.

What state is the Montezuma Castle National Monument located in?

19. Pullman National Monument

All those travelers who have gone long distances on a train will appreciate the Pullman National Monument.

What state is the Pullman National Monument located in?

20. Catoctin Mountain Park

You will find that Camp David, located in Catoctin Mountain Park, is not open to visitors.

What state is the Catoctin Mountain Park located in?

21. Longfellow House Washington's Headquarters National Historic Site

Learn about the house belonging to one of the world's most important poets of the nineteenth century.

What state is the Longfellow House Washington's Headquarters National Historic Site located in?

22. Homestead National Monument

This monument commemorates the act that was key in giving many pioneers the ability to own their own land in the west.

What state is the Homestead National Monument located in?

23. Morristown National Historic Park

When you think of this park, just remember the cold winter that General Washington and his troops spent here.

What state is the Morristown National Historic Park located in?

24. Silas Deane House National Historic Landmark

Remember the great contributions Silas Deane made to the Continental cause when you visit the Silas Deane House.

What state is the Silas Deane House National Historic Landmark located in?

25. Booker T. Washington National Monument

The Civil War was fought to set all free from slavery, and I am grateful to be one of the many, many examples of what a free person can achieve.

What state is the Booker T. Washington National Monument located in?

26. Touro Synagogue National Historic Site

Remember always what President Washington said when he pledged to the Hebrew congregation at our synagogue that the United States would not sanction bigotry or assist persecution.

What state is the Touro Synagogue National Historic Site located in?

27. West Virginia Independence Hall National Historic Landmark

Our independence from Virginia was granted at the beginning of the Civil War.

What state is the West Virginia Independence Hall National Historic Landmark located in?

28. Tuskegee Airmen National Historic Site

Never forget the contributions made by the first African American military pilots who were trained at the Tuskegee Institute.

What state is the Tuskegee Airmen National Historic Site located in?

29. Theodore Roosevelt National Park

President Roosevelt came to know much of the area when he came here to hunt before becoming the twenty-sixth president of the United States.

What state is the Theodore Roosevelt National Park located in?

30. Grand Portage National Monument

The Native American people and the North West Company had an interesting history involving the North American fur trade.

What state is the Grand Portage National Monument located in?

31. Namur Historic District National Historic Landmark

The Namur Historic District National Historic Landmark is where you will find the Belgian and French influence very notable.

What state is the Namur Historic District National Historic Landmark located in?

32. Andrew Johnson National Historic Site

The home of the seventeenth president of the U.S. and a national cemetery make a visit to this area very solemn and memorable.

What state is the Andrew Johnson National Historic Site located in?

33. River Raisin National Battlefield Park

Your study of the War of 1812 should include the battles fought here between the Native Americans and the U.S. troops.

What state is the River Raisin National Battlefield Park located in?

34. David Berger National Memorial

This solemn memorial honors an American citizen who was among the eleven Israeli athletes killed at the 1972 Olympic Games in Munich, Germany.

What state is the David Berger National Monument located in?

35. Mount Rainier National Park

What beautiful splendor can be seen from this amazing National Park!

What state is Mount Rainier National Park located in?

36. Great Basin National Park

The assortment of North American mammals found in this area is unbelievable.

What state is Great Basin National Park located in?

37. Natchez National Historical Park

From the home of an African American barber, to a beautiful estate, and on to a French fort, this historical park helps us see the contrasts of everyday life in the past.

What state is Natchez National Historical Park located in?

38. City of Rocks National Reserve

If you like rock climbing, you will want to see the City of Rocks National Reserve where you can study the history of the old west while taking part in extreme sports.

What state is City of Rocks National Reserve located in?

39. Marsh-Billings-Rockefeller National Historic Park

If you want to study the history of conservation in America, this park has much information to share.

What state is the Marsh-Billings-Rockefeller National Historic Park located in?

40. Harry S. Truman National Historic Site

This site includes the home of President Truman, the Truman Farm Home, and the Harry S. Truman Presidential Library.

What state is the Harry S. Truman National Historic Site located in?

41. First State National Park

When this park was created, all fifty states now had a national park unit in them.

What state is First State National Park located in?

42. Crater Lake National Park

Please visit us again to experience our beautiful deep blue lake and towering cliffs, but be aware of the more than forty-four feet of snow we get each year!

What state is Crater Lake National Park located in?

43. Golden Spike National Historic Site

A tough job completed—experience the place where the last spike was driven in for the Transcontinental Railroad.

What state is the Golden Spike National Historic Site located in?

44. Petroglyph National Monument

How exciting to see the rock carving of designs and symbols carved by Native Americans and early Spanish settlers.

What state is the Petroglyph National Monument located in?

45. Jewel Cave National Monument

Sparkling cave formations have brought many people to Jewel Cave since it was discovered.

What state is the Jewel Cave National Monument located in?

46. Palo Alto Battlefield National Historical Park

Experience reminders of the first battle of the Mexican War when you visit this national historical park.

What state is Palo Alto Battlefield National Historical Park located in?

47. Washita Battlefield National Historic Site

Did you realize that someone survived the surprise attack that Custer led on a Southern Cheyenne village and lived to fight against Custer at the Battle of the Little Big Horn?

What state is Washita Battlefield National Historic Site located in?



48. Fort Raleigh National Historic Site

Have you ever wondered what happened to the lost colony that is preserved and protected by this national historic site?

What state is Fort Raleigh National Historic Site located in?

49. Glacier National Park

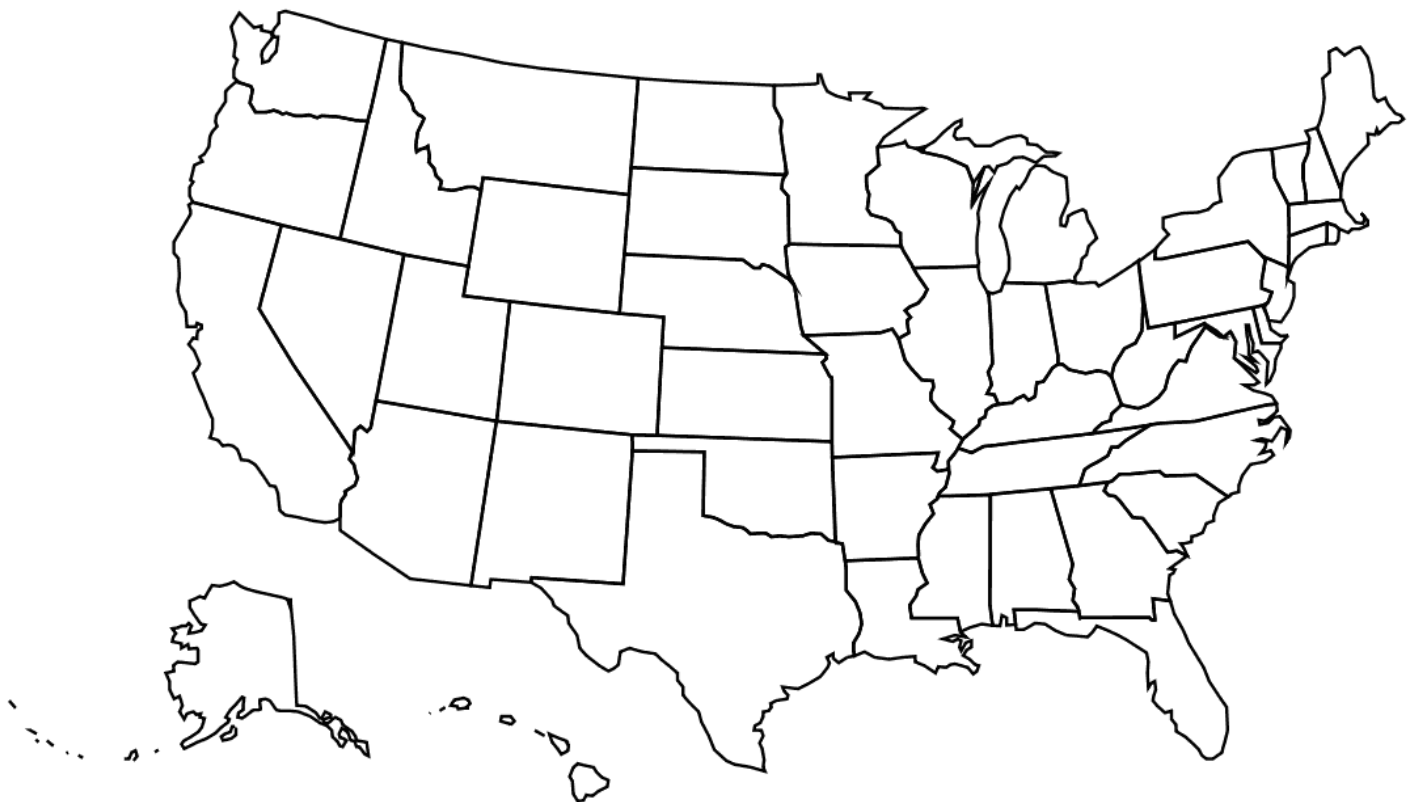
This beautiful area was the tenth national park to be mandated by the U.S.

What state is Glacier National Park located in?

50. Saint-Gaudens National Historic Site

So many have been honored with national historic sites, including this sculptor.

What state is Saint-Gaudens National Historic Site located in?




## Preserving the Past

What event or war does each park represent or preserve? Write the correct letter beside each number.

- |         |  |                                  |
|---------|--|----------------------------------|
| ____1.  | Arches National Park, Utah                                     | a. Creek War                     |
| ____2.  | Chaco Culture National Historic Park, New Mexico               | b. History of the Ojibwe People  |
| ____3.  | Chimney Rock National Historic Site, Nebraska                  | c. Mexican War                   |
| ____4.  | Golden Spike National Historic Site, Utah                      | d. Natural Bridges               |
| ____5.  | Grand Portage National Monument, Minnesota                     | e. Oregon Trail                  |
| ____6.  | Horseshoe Bend National Military Park, Alabama                 | f. The Presidents                |
| ____7.  | Jean Lafitte National Historic Park and Preserve,<br>Louisiana | g. Pueblo Culture                |
| ____8.  | Katmai National Park and Preserve, Alaska                      | h. Revolutionary War             |
| ____9.  | Montezuma Castle National Monument, Arizona                    | i. Southern Sinagua Culture      |
| ____10. | Morristown National Historic Park, New Jersey                  | j. Symbol of France's Friendship |
| ____11. | Mount Rushmore National Memorial, South Dakota                 | k. Symbol of Religious Freedom   |
| ____12. | Palo Alto Battlefield National Historic Park, Texas            | l. Transcontinental Railroad     |
| ____13. | Statue of Liberty National Monument, New York                  | m. Volcanos                      |
| ____14. | Touro Synagogue National Historic Site, Rhode<br>Island        | n. War of 1812                   |

# 50-State Crossword Puzzle

Using the clues on the next page, fill the names of the states for each historical site into the crossword puzzle.



**Across:**

3. Glacier National Park
6. Chimney Rock National Historic Site
7. Jefferson National Expansion Memorial
8. Abraham Lincoln Birthplace
10. Antietam National Battlefield
11. Carl Sandburg Home National Historic Site
13. Grand Portage National Monument
17. San Juan Island National Historical Park
18. Fort Donelson National Battlefield
20. First State National Park
23. Yosemite National Park
26. Fort Frederica National Monument
27. Crater Lake National Park
28. Black Canyon of the Gunnison
29. Herbert Hoover National Historic Site
31. Kalaupapa National Historical Park
33. City of Rocks National Reserve
35. Washita Battlefield National Historic Site
38. Booker T. Washington National Monument
40. Tuskegee Institute National Historic Site
41. Pea Ridge National Military Park
43. Paterson Great Falls National Historic Park
44. Minuteman Missile National Historic Site
45. Denali National Park and Preserve

**Down:**

1. West Virginia Independence Hall National Historic Landmark
2. Johnstown Flood National Memorial
3. Acadia National Park
4. Marsh-Billings-Rockefeller National Historic Park
5. Namur Historic District
9. Silas Deane House National Historic Landmark
10. Vicksburg National Military Park
11. Salinas Pueblo Missions
12. Chamizal National Memorial
13. Adams National Historical Park
14. Cowpens National Battlefield
15. Roger Williams National Memorial
16. First Ladies National Historic Site
19. Saint-Gaudens National Historic Site
21. Cane River Creole National Historical Park
22. Castle Clinton National Monument
24. Fort Caroline National Memorial
25. Theodore Roosevelt National Park
29. George Rogers Clark National Historic Park
30. River Raisin National Battlefield Park
32. Fort Laramie National Historic Site
34. Great Basin National Park
36. Canyonlands National Park
37. Montezuma Castle National Monument
39. Lincoln Home National Historic Site
42. Monroe Elementary School National Historic Landmark

Name of Park: \_\_\_\_\_

Location: \_\_\_\_\_

Date Established: \_\_\_\_\_

Key Facts and Features: \_\_\_\_\_

---

---

---

---

---

---

---

---

---

---

---

---

---

---

---

---

---

---

---

---

---

---

---

---

---

---





---

---

---

---

---

---

---

---

---

---

---

---

---

---

---

---

---

---

---

Name of Park: \_\_\_\_\_

Location: \_\_\_\_\_

Date Established: \_\_\_\_\_

Key Facts and Features: \_\_\_\_\_

---

---

---

---

---

---

---

---

---

---

---

---

---

---

---

---

---

---

---

---

---

---

---

---





---

---

---

---

---

---

---

---

---

---

---

---

---

---

---

---

---

---

---



# Answer Key

## Choose the State

- |                    |  |
|--------------------|--|
| 1. Alabama         | x. Horseshoe Bend National Historic Park   |
| 2. Alaska          | aa. Kenai Fjords National Park   |
| 3. Arizona         | nn. Petrified Forest National Park   |
| 4. Arkansas        | y. Hot Springs National Park   |
| 5. California      | cc. Lassen Volcanic National Park  |
| 6. Colorado        | ii. Mesa Verde National Park   |
| 7. Connecticut     | vv. Weir Farm National Historic Site   |
| 8. Delaware        | mm. New Castle Court House Museum (part of the First State National Historic Park) |
| 9. Florida         | n. Dry Tortugas National Park  |
| 10. Georgia        | bb. Kennesaw Mountain National Battlefield   |
| 11. Hawaii         | v. Haleakala National Park   |
| 12. Idaho          | l. Craters of the Moon National Monument   |
| 13. Illinois       | ee. Lincoln Home National Historic Site  |
| 14. Indiana        | dd. Lincoln Boyhood National Memorial  |
| 15. Iowa           | w. Herbert Hoover National Historic Site   |
| 16. Kansas         | p. Fort Larned National Historic Site  |
| 17. Kentucky       | a. Abraham Lincoln Birthplace National Historic Park                               |
| 18. Louisiana      | z. Jean Lafitte National Historic Park   |
| 19. Maine          | b. Acadia National Park  |
| 20. Maryland       | i. Clara Barton National Historic Site   |
| 21. Massachusetts  | jj. Minute Man National Historic Park  |
| 22. Michigan       | oo. River Raisin National Battlefield  |
| 23. Minnesota      | r. Grand Portage National Monument   |
| 24. Mississippi    | g. Brices Cross Roads National Battlefield   |
| 25. Missouri       | tt. Ulysses S. Grant National Historic Site  |
| 26. Montana        | q. Glacier National Park   |
| 27. Nebraska       | c. Agate Fossil Beds National Monument   |
| 28. Nevada         | t. Great Basin National Park   |
| 29. New Hampshire  | qq. Saint-Gaudens National Historic Site   |
| 30. New Jersey     | ss. Thomas Edison National Historic Park   |
| 31. New Mexico     | h. Carlsbad Caverns National Park  |
| 32. New York       | hh. Martin Van Buren National Historic Site  |
| 33. North Carolina | xx. Wright Brothers National Memorial  |
| 34. North Dakota   | rr. Theodore Roosevelt National Park   |
| 35. Ohio           | m. Dayton Aviation Heritage National Historic Park                                 |
| 36. Oklahoma       | uu. Washita Battlefield National Historic Site                                     |
| 37. Oregon         | k. Crater Lake National Park   |
| 38. Pennsylvania   | o. Eisenhower National Historic Site   |
| 39. Rhode Island   | pp. Roger Williams National Memorial   |
| 40. South Carolina | j. Cowpens National Battlefield  |
| 41. South Dakota   | f. Badlands National Park  |
| 42. Tennessee      | d. Andrew Johnson National Historic Site   |
| 43. Texas          | u. Guadalupe Mountains National Park   |
| 44. Utah           | e. Arches National Park  |
| 45. Vermont        | gg. Marsh-Billings-Rockefeller National Historic Park                              |
| 46. Virginia       | ff. Manassas National Battlefield  |
| 47. Washington     | kk. Mount Rainier National Park  |
| 48. West Virginia  | ww. West Virginia Independence Hall National Historic Landmark                     |
| 49. Wisconsin      | ll. Namur Historic District  |
| 50. Wyoming        | s. Grand Teton National Park   |

## What Year Was That?

1. 1972
2. 1936
3. 2011
4. 1895
5. 1871
6. 1956
7. 1924
8. 2004
9. 1906
10. 1984
11. 1902
12. 1872
13. 1930
14. 1980
15. 1911
16. 1890
17. 1916
18. 1937
19. 2002
20. 1919
21. 1996


## Decoding the States

1. Pennsylvania
2. South Dakota
3. Utah
4. North Carolina
5. Wisconsin
6. Washington
7. Virginia
8. Alaska
9. Florida
10. Illinois
11. Kansas
12. Massachusetts
13. Nebraska
14. New Jersey

## Wars in American History

1. Civil War
2. World War II
3. Revolutionary War
4. Civil War
5. World War II
6. Revolutionary War
7. World War II
8. Civil War
9. Civil War
10. Revolutionary War
11. World War II
12. Civil War
13. World War II
14. Civil War
15. World War II

## Historic Word Search



Word Search and Answer Key generated by [www.armoredpenguin.com](http://www.armoredpenguin.com).

## Choose the Site

1. a
2. c
3. f
4. b
5. e
6. d
7. j
8. i
9. h
10. g

## Where Would You Be?

1. b. Puerto Rico
2. a. Illinois
3. b. Hawaii
4. c. Utah
5. c. Ohio
6. a. Virginia
7. c. Virgin Islands
8. b. Wyoming
9. a. Alaska
10. a. California

## Decode the Historic Place

1. Carlsbad
2. Theodore
3. Synagogue
4. Billings
5. Coal
6. Cowpens
7. Chiricahua
8. Gaudens
9. Silas
10. Horseshoe
11. River
12. Herbert
13. Arkansas
14. First
15. Acadia
16. Mesa Verde
17. Antietam
18. Mammoth
19. Creole


## Choose the Historic Person

1. g
2. f
3. c
4. j
5. i
6. d
7. b
8. h
9. a
10. e

## What Do You Know?

1. True (Appomattox Court House National Historic Park, Virginia)
2. False—it is actually the first (Abraham Lincoln Birthplace National Historic Park, Kentucky)
3. True (Federal Hall National Monument, New York)
4. True (Pea Ridge Battlefield National Military Park, Arkansas)
5. True (George Rogers Clark National Historic Park, Indiana)
6. False—it is Haleakala National Park (Haleakala National Park, Hawaii)
7. True (Acadia National Park, Maine)
8. False—it is Devil's Tower National Monument (Devil's Tower National Monument, Wyoming)
9. False—it is Nicodemus National Historic Site (Nicodemus National Historic Site, Kansas)
10. True (Catoctin Mountain Park, Maryland)
11. False—it is Mount McKinley (Denali National Park and Preserve, Alaska)
12. False—it later belonged to Henry Wadsworth Longfellow (Longfellow House-Washington's Headquarters National Historic Site, Massachusetts)
13. True (Castle Clinton National Monument, New York)
14. True (David Berger National Memorial, Ohio)
15. False—it was the tenth (Glacier National Park, Montana)
16. True (First State National Park, Delaware and Pennsylvania)
17. True (Dayton Aviation Heritage National Historic Park, Ohio)
18. True (Crater Lake National Park, Oregon)
19. False—it is Petroglyph National Monument (Petroglyph National Monument, New Mexico)
20. True (African American Civil War Memorial, Washington D.C.)

## Historic Tiles



## Which Fort Was It?

1. c (Fort Laramie National Historic Site, Wyoming)
2. a (Fort Necessity National Battlefield, Pennsylvania)
3. c (Fort Raleigh National Historic Site, North Carolina)
4. b (Fort Union National Monument, New Mexico)
5. b (Morristown National Historic Park, New Jersey)
6. a (Fort Union Trading Post National Historic Site, Montana and North Dakota)
7. c (Fort Larned National Historic Site, Kansas)
8. b (Fort Frederica National Monument, Georgia)
9. a (Fort Caroline National Memorial, Florida)
10. c (Fort Point National Historic Site, California)
11. a (Fort Sumter National Monument, South Carolina)
12. b (Fort Dupont Park, District of Columbia)

## How Tall?

1. Gateway Arch at the Jefferson National Expansion Memorial

There are 5,280 feet in a mile. The Gateway Arch at the Jefferson National Expansion Memorial is less than one-eighth of this amount. Figure out the number of feet in one-eighth of a mile, then subtract 30 feet from your answer and you will have the height of the Gateway Arch at the Jefferson National Expansion Memorial.

Answer:  $5,280 \text{ feet per mile} \div 8 = 660 \text{ feet}$   
 $660 \text{ feet} - 30 \text{ feet} = 630 \text{ feet}$ —the height of the Gateway Arch at the Jefferson National Expansion Memorial

2. Pennsylvania Monument at Gettysburg

The Pennsylvania Monument at Gettysburg is equal in height to 1,320 inches. How many feet tall is it?

Answer:  $1,320 \text{ inches} \div 12 \text{ inches per foot} = 110 \text{ feet}$ —the height of the Pennsylvania Monument at Gettysburg



### 3. Perry's Victory and International Peace Memorial

If the living room in your house was 16 feet wide, you would have to put 22 of them side by side to see how tall Perry's Victory and International Peace Memorial is. How tall is it?

Answer:  $16 \text{ feet} \times 22 = 352 \text{ feet}$ —the height of Perry's Victory and International Peace Memorial

### 4. Washington Monument

If John is 5 feet tall, his younger sister Susan is  $4\frac{1}{2}$  feet tall, and his little brother Jim is 3 feet tall, how tall is the Washington Monument if you would have to stand 50 Susans on top of each other, then add 25 Jims on top of each other, and finally add 51 Johns on top of each other to equal the height of the Washington Monument?

Answer:  $4\frac{1}{2}$  feet = Susan's height and we need 50 Susans  
3 feet = Jim's height and we need 25 Jims  
5 feet = John's height and we need 51 Johns

$$(4\frac{1}{2} \text{ feet} \times 50) + (3 \text{ feet} \times 25) + (5 \text{ feet} \times 51) = \text{height of Washington Monument}$$
$$225 \text{ feet} + 75 \text{ feet} + 255 \text{ feet} = 555 \text{ feet (the height of the Washington Monument)}$$

### 5. Mount Rainier

There are 5,280 feet in a mile. There are 12 inches in a foot. How many feet tall is Mount Rainier if it is equal to 2 miles and 46,200 inches? (Remember to convert all your measurements to feet!)

Answer:  $(2 \text{ miles} \times 5,280 \text{ ft./mile}) + (46,200 \text{ in.} \div 12 \text{ inches/ft.}) = \text{height of Mount Rainier}$   
 $10,560 \text{ feet} + 3,850 \text{ feet} = 14,410 \text{ feet (the height of Mount Rainier)}$

### 6. United States National Memorial Arch at Valley Forge

There are 3 feet in a yard. There are 12 inches in a foot. If the United States National Memorial Arch at Valley Forge is 17 yards and 108 inches high, how tall is it in feet?

Answer: In this problem, we will use a letter (called a variable) to symbolize the height of the United States National Memorial Arch at Valley Forge  
 $h = \text{height of United States National Memorial Arch at Valley Forge}$

$$(17 \text{ yards} \times 3 \text{ ft./yard}) + (108 \text{ inches} \div 12 \text{ in./ft.}) = h$$
$$51 \text{ feet} + 9 \text{ feet} = h$$
$$60 \text{ feet} = h \text{ (height of the United States National Memorial Arch)}$$

## 7. Statue of Liberty

If the Statue of Liberty was standing on a mountain that was 2 miles above sea level, how tall would the Statue of Liberty be if the total height of the mountain and the statue together was 10,865 feet.

Answer: The mountain is 2 miles high =  $2 \times 5,280$  feet in a mile.  
The total height of the two together is 10,865 feet.  
The height of the Statue of Liberty is shown as  $h$ .

$$\begin{aligned}10,865 \text{ feet} - (2 \times 5,280 \text{ feet}) &= h \\10,865 \text{ feet} - 10,560 \text{ feet} &= h \\305 \text{ feet} &= h \text{ (height of the Statue of Liberty)}\end{aligned}$$

## 8. Bunker Hill Monument in Boston

Mike's dog is 12 inches tall. Karen's cat is 8 inches tall. Jeremy's gerbil is 4 inches tall. How tall would the Bunker Hill Monument be if you if you would have to stand 100 of Mike's dogs on top of each other, then add 150 of Karen's cats on top of each other, and finally add 63 of Jeremy's gerbils on top of each other to equal the height of the Bunker Hill Monument? Give your answer in feet.

Answer: 12 inches = height of Mike's dog and we need 100 dogs  
8 inches = height of Karen's cat and we need 150 cats  
4 inches = height of Jeremy's gerbil and we need 63 gerbils  
Remember there are 12 inches in a foot and we need the height ( $h$ ) of the  
Bunker Hill Monument in feet.

$$\begin{aligned}[(12 \text{ inches} \times 100) + (8 \text{ inches} \times 150) + (4 \text{ inches} \times 63)] \div 12 &= h \\(1200 \text{ inches} + 1200 \text{ inches} + 252 \text{ inches}) \div 12 &= h \\2652 \text{ inches} \div 12 &= h \\221 \text{ feet} &= h \text{ (height of Bunker Hill Monument)}\end{aligned}$$

## 9. San Jacinto Monument

Joe is building a replica of the San Jacinto Monument for a history project. He wanted to build his replica  $\frac{1}{30}$  the size of the real monument, but found out that would still be too high. He decided to build it  $\frac{1}{2}$  the size he originally planned. If his replica will be  $9\frac{1}{2}$  feet tall when he is finished, how tall is the real San Jacinto Monument?

Answer:  $h$  = height of real San Jacinto Monument  
 $9\frac{1}{2}$  feet =  $\frac{1}{2}$  of  $\frac{1}{30}$  the height of the real San Jacinto Monument (Joe's replica)

$$\begin{aligned}9\frac{1}{2} \text{ feet} &= \frac{1}{2} \times \frac{1}{30} \times h \\9\frac{1}{2} \text{ feet} &= \frac{1}{60} \times h \\60(9\frac{1}{2} \text{ feet}) &= 60/1 \times \frac{1}{60} \times h \\570 \text{ feet} &= h \text{ (height of real San Jacinto Monument)}\end{aligned}$$

## 10. Mount McKinley

If there are 5,280 feet in a mile and if Mount McKinley is 9,600 inches less than 4 miles high, what is the height of Mount McKinley (in feet).

Answer:  $h = \text{height of Mount McKinley}$   
 $(4 \times 5,280 \text{ feet/mile}) - (9,600 \text{ inches} \div 12 \text{ inches/foot}) = h$   
 $21,120 \text{ feet} - 800 \text{ feet} = h$   
 $20,320 \text{ feet} = h \text{ (height of Mount McKinley)}$

## Sense of Direction

1. a (Illinois), c (Tennessee), b (Alabama)
2. b (Florida), a (Texas), c (California)
3. c (Washington), b (Nebraska), a (South Carolina)
4. b (Virginia), c (Washington D.C.), a (Pennsylvania)
5. c (New York), a (Colorado), b (Arizona)
6. a (Idaho), c (Missouri), b (Kentucky)
7. a (Georgia), b (South Dakota), c (Montana)
8. a (Alaska), c (Washington), b (Hawaii)
9. b (New Mexico), c (Indiana), a (Vermont)
10. c (Massachusetts), a (Ohio), b (Oregon)

## Choose the Historic Person, Part Two

1. c
2. n
3. g
4. j
5. e
6. i
7. b
8. h
9. a
10. l
11. m
12. f
13. d
14. k

Find the State Letter by Letter

1. Gettysburg National Military Park

**Please visit us in Gettysburg again soon.**

**Pennsylvania** (answer provided)

2. Pea Ridge National Military Park

This **park has** the Civil War battlefield that **has** been kept the most **intact** in the United States.

What state is Pea Ridge National Military Park located in? **Arkansas**

3. Andersonville National Historic Site

The **National Prisoner** of War Museum is located in Andersonville, reminding us of our **obligation** to give our **gratitude** to these brave people.

What state is Andersonville National Historic Site located in? **Georgia**

4. Castillo De San Marcos National Monument

Visit the **only** seventeenth-century military **fort** in the **United** States.

What state is Castillo De San Marcos National Monument located in? **Florida**

5. George Rogers Clark National Historic Park

**Visit** the **monument and** remember the **recapture** of Fort Sackville from the British on February 25, 1779.

What state is George Rogers Clark National Historic Park located in? **Indiana**

6. Jean Lafitte National Historical Park and Preserve

**You can visit** this park **and** preserve that **contains** the Chalmette Battlefield, important in the War of 1812.

What state is Jean Lafitte National Historical Park and Preserve located in?  
**Louisiana**

7. Fort Larned National Historic Site

Fort **Larned's** **mission** **began** as a way to **keep** the mail safe and grew into a mission to protect the Santa Fe Trail.

What state is Fort Larned National Historic Site located in? **Kansas**

8. Acadia National Park

Don't miss **Cadillac Mountain** and the **beautiful** stone bridges on your next trip to Acadia National Park.

What state is Acadia National Park located in? **Maine**

9. Herbert Hoover National Historic Site

See the place **where** the **thirty-first** president of the United **States** was **born**.

What state is the Herbert Hoover National Historic Site located in? **Iowa**

10. Haleakala National Park

**Why** not visit **Haleakala** on your next **visit** to this island state?

What state is the Haleakala National Park located in? **Hawaii**

11. Fort Point National Historic Site

See **Fort** Point, **overlooking** a **beautiful** bridge, on the western **coast** of the U.S.

What state is Fort Point National Historic Site located in? **California**

12. Denali National Park and Preserve

Don't miss the highest **mountain** on the North **American** continent when you visit **Denali** National **Park** and Preserve.

What state is Denali National Park and Preserve located in? **Alaska**

13. Federal Hall National Monument

**Keep in mind** that this is the site of **George** Washington's inauguration at this national monument **when you** visit.

What state is the Federal Hall National Monument located in? **New York**

14. Abraham Lincoln Birthplace National Historical Park

**You will want** to see the park that is **known** as the first memorial to President Abraham Lincoln.

What state is the Abraham Lincoln Birthplace National Historical Park located in? **Kentucky**

15. Fort Sumter National Monument

**Thinking** of the **years** of **fighting** that **followed** the fighting at **Fort Sumter** is even more meaningful when you see the **actual** monument.

What the state is the Fort Sumter National Monument located in? **South Carolina**

16. Devil's Tower National Monument

**What an amazing** geologic feature **you** will see at Devil's Tower **in** the Black Hills.

What state is Devil's Tower National Monument located in? **Wyoming**

17. Bent's Old Fort National Historic Site

**Come and** see Bent's **Old Fort** that was **built** in order to trade with trappers and the Indians, but was abandoned in 1849.

What state is Bent's Old Fort National Historic Site located in? **Colorado**

18. Montezuma Castle National Monument

Please hurry back to **visit** the **Montezuma Castle** National **Monument**.

What state is the Montezuma Castle National Monument located in? **Arizona**

19. Pullman National Monument

**All** those travelers who have **gone** long **distances** on a **train** will appreciate the Pullman National Monument.

What state is the Pullman National Monument located in? **Illinois**

20. Catoctin Mountain Park

**You will** find that **Camp David**, located in Catoctin Mountain Park, is not open to visitors.

What state is the Catoctin Mountain Park located in? **Maryland**

21. Longfellow House Washington's Headquarters National Historic Site

**Learn** about **the house** belonging to one of the world's **most important** poets of the nineteenth **century**.

What state is the Longfellow House Washington's Headquarters National Historic Site located in? **Massachusetts**

22. Homestead National Monument

This monument **commemorates** the act that was **key** in giving **many** pioneers the **ability** to own their own land in the **west**.

What state is the Homestead National Monument located in? **Nebraska**

23. Morristown National Historic Park

**When** you think of this park, **just remember** the cold winter that General Washington and his troops spent **here**.

What state is the Morristown National Historic Park located in? **New Jersey**

24. Silas Deane House National Historic Landmark

Remember the **great contributions** Silas Deane made to the **Continental cause** when you visit the Silas Deane House.

What state is the Silas Deane House National Historic Landmark located in? **Connecticut**

25. Booker T. Washington National Monument

The **Civil War** was fought to set all free from slavery and **I** am **g**rateful to be **o**ne of the many, many examples of what a free person can **a**chieve.

What state is the Booker T. Washington National Monument located in? **Virginia**

26. Touro Synagogue National Historic Site

**Remember always** what President **W**ashington **s**aid when he pledged to the Hebrew **c**ongregation at our synagogue that the **U**nited States would **n**ot sanction bigotry or assist persecution.

What state is the Touro Synagogue National Historic Site located in? **Rhode Island**

27. West Virginia Independence Hall National Historic Landmark

Our **i**ndependence from **V**irginia was **g**anted at the beginning of the **C**ivil **W**ar.

What state is the West Virginia Independence Hall National Historic Landmark located in? **West Virginia**

28. Tuskegee Airmen National Historic Site

Never forget the **c**ontributions **m**ade by the first **A**frican **A**merican military pilots who were trained at the Tuskegee Institute.

What state is the Tuskegee Airmen National Historic Site located in? **Alabama**

29. Theodore Roosevelt National Park

**P**resident **R**oosevelt **c**ame to **k**now much of the **a**rea when he came here to hunt before becoming the twenty-sixth president of the United States.

What state is the Theodore Roosevelt National Park located in? **North Dakota**

30. Grand Portage National Monument

The **N**ative **A**merican people and the **N**orth **W**est Company had an interesting history involving the North American fur trade.

What state is the Grand Portage National Monument located in? **Minnesota**



31. Namur Historic District National Historic Landmark

The Namur **Historic District National** Historic Landmark is **where** you will find the Belgian and French influence very notable.

What state is the Namur Historic District National Historic Landmark located in? **Wisconsin**

32. Andrew Johnson National Historic Site

The home of the **seventeenth** president of the **U.S.** and a national cemetery make a visit to this area very solemn and memorable.

What state is the Andrew Johnson National Historic Site located in? **Tennessee**

33. River Raisin National Battlefield Park

Your study of the War of 1812 should **include** the **battles fought** here between the **Native Americans** and the U.S. troops.

What state is the River Raisin National Battlefield Park located in? **Michigan**

34. David Berger National Memorial

This **solemn** memorial **honors** an American citizen who was among the eleven Israeli athletes killed at the 1972 Olympic Games in Munich, Germany.

What state is the David Berger National Monument located in? **Ohio**

35. Mount Rainier National Park

**What** beautiful **splendor** can be seen from **this** amazing National Park!

What state is Mount Rainier National Park located in? **Washington**

36. Great Basin National Park

The assortment of **North American** mammals **found** in this area is **unbelievable**.

What state is Great Basin National Park located in? **Nevada**

37. Natchez National Historical Park

From the **home** of an African American barber to a beautiful **estate**, and on to a French fort, **this historical park helps** us see the contrasts of everyday life in the **past**.

What state is Natchez National Historical Park located in? **Mississippi**

38. City of Rocks National Reserve

**If** you like **rock climbing**, you will **want** to see the City of Rocks National Reserve **where** you can **study** the history of the old west while taking part in extreme sports.

What state is City of Rocks National Reserve located in? **Idaho**

39. Marsh-Billings-Rockefeller National Historic Park

If you want to study the history of **conservation** in **America**, this park has much information to share.

What state is the Marsh-Billings-Rockefeller National Historic Park located in? **Vermont**

40. Harry S. Truman National Historic Site

**This site** includes the **home** of President **Truman**, the Truman Farm Home, and the Harry S. Truman Presidential Library.

What state is the Harry S. Truman National Historic Site located in? **Missouri**

41. First State National Park

**When** this **park** was **created**, **all** fifty states now **had** a national park unit in them.

What state is First State National Park located in? **Delaware**

42. Crater Lake National Park

Please visit us **again** to **experience our** beautiful deep blue lake and **towering** cliffs, but be aware of the more than forty-four feet of snow we get each year!

What state is Crater Lake National Park located in? **Oregon**

43. Golden Spike National Historic Site

**A tough** job completed—experience the place where the last spike was driven in for the Transcontinental Railroad.

What state is the Golden Spike National Historic Site located in? **Utah**

44. Petroglyph National Monument

**How exciting** to see the rock carving of designs and symbols carved by **Native Americans** and early Spanish settlers.

What state is the Petroglyph National Monument located in? **New Mexico**

45. Jewel Cave National Monument

**Sparkling** cave formations have **brought** many people to Jewel Cave since it was **discovered**.

What state is the Jewel Cave National Monument located in? **South Dakota**

46. Palo Alto Battlefield National Historical Park

**Experience** reminders of the first **battle** of the Mexican War when you visit this national historical park.

What state is Palo Alto Battlefield National Historical Park located in? **Texas**

47. Washita Battlefield National Historic Site

Did **you realize** that **someone** survived the surprise **attack** that Custer led on a **Southern Cheyenne** village and lived to fight against Custer at the Battle of the Little Big Horn?

What state is Washita Battlefield National Historic Site located in? **Oklahoma**

48. Fort Raleigh National Historic Site

**Have you ever wondered** what happened to the **lost colony** that is preserved and protected by this national historic site?

What state is Fort Raleigh National Historic Site located in? **North Carolina**

49. Glacier National Park

This beautiful area was the tenth **national** park to be **mandated** by the U.S.

What state is Glacier National Park located in? **Montana**

50. Saint-Gaudens National Historic Site

So **many** have been **honored** with **national** **historic** sites, including this **sculptor**.

What state is Saint-Gaudens National Historic Site located in? **New Hampshire**

Preserving the Past

1. d

2. g

3. e

4. l

5. b

6. a

7. n

8. m

9. i

10. h

11. f

12. c

13. j

14. k

## 50-State Crossword Puzzle

**Across:**

3. Montana
6. Nebraska
7. Missouri
8. Kentucky
10. Maryland
11. North Carolina
13. Minnesota
17. Washington
18. Tennessee
20. Delaware
23. California
26. Georgia
27. Oregon
28. Colorado
29. Iowa
31. Hawaii
33. Idaho
35. Oklahoma
38. Virginia
40. Alabama
41. Arkansas
43. New Jersey
44. South Dakota
45. Alaska

**Down:**

1. West Virginia
2. Pennsylvania
3. Maine
4. Vermont
5. Wisconsin
9. Connecticut
10. Mississippi
11. New Mexico
12. Texas
13. Massachusetts
14. South Carolina
15. Rhode Island
16. Ohio
19. New Hampshire
21. Louisiana
22. New York
24. Florida
25. North Dakota
29. Indiana
30. Michigan
32. Wyoming
34. Nevada
36. Utah
37. Arizona
39. Illinois
42. Kansas



Thank you for downloading my product! I pray it is a blessing to you and your family. If you'd like to view more of my products and freebies, you'll find them at [WriteBonnieRose.com](http://WriteBonnieRose.com). I am adding new material almost every week, so please check back often or sign up to receive my newsletter so you don't miss a thing.

At [WriteBonnieRose.com](http://WriteBonnieRose.com), you'll find:

- Resources for Teaching Kids About the Persecuted Church and Unreached People Groups
- Copywork
- History Resources and Printables
- Holiday Resources and Printables
- Coloring Pages
- Notebooking Pages
- Timeline Worksheets and Resources
- Short Stories for Kids
- Writing Opportunities
- How to Write for Homeschoolers

I'd love to connect with you! In addition to my website, you can find me on:

[CurrClick](#)  
[Educents](#)  
[The Old Schoolhouse® Store](#)  
[Teachers Pay Teachers](#)  
[Facebook](#)  
[Pinterest](#)  
[Twitter](#)  
[Google+](#)  
[LinkedIn](#)

