

New York

New York is located in the northeastern part of the United States. It became the 11th state to join the Union on July 26, 1788. The state capital is Albany. Some of the other major cities include Buffalo, Rochester, Yonkers, Syracuse, and New York City.

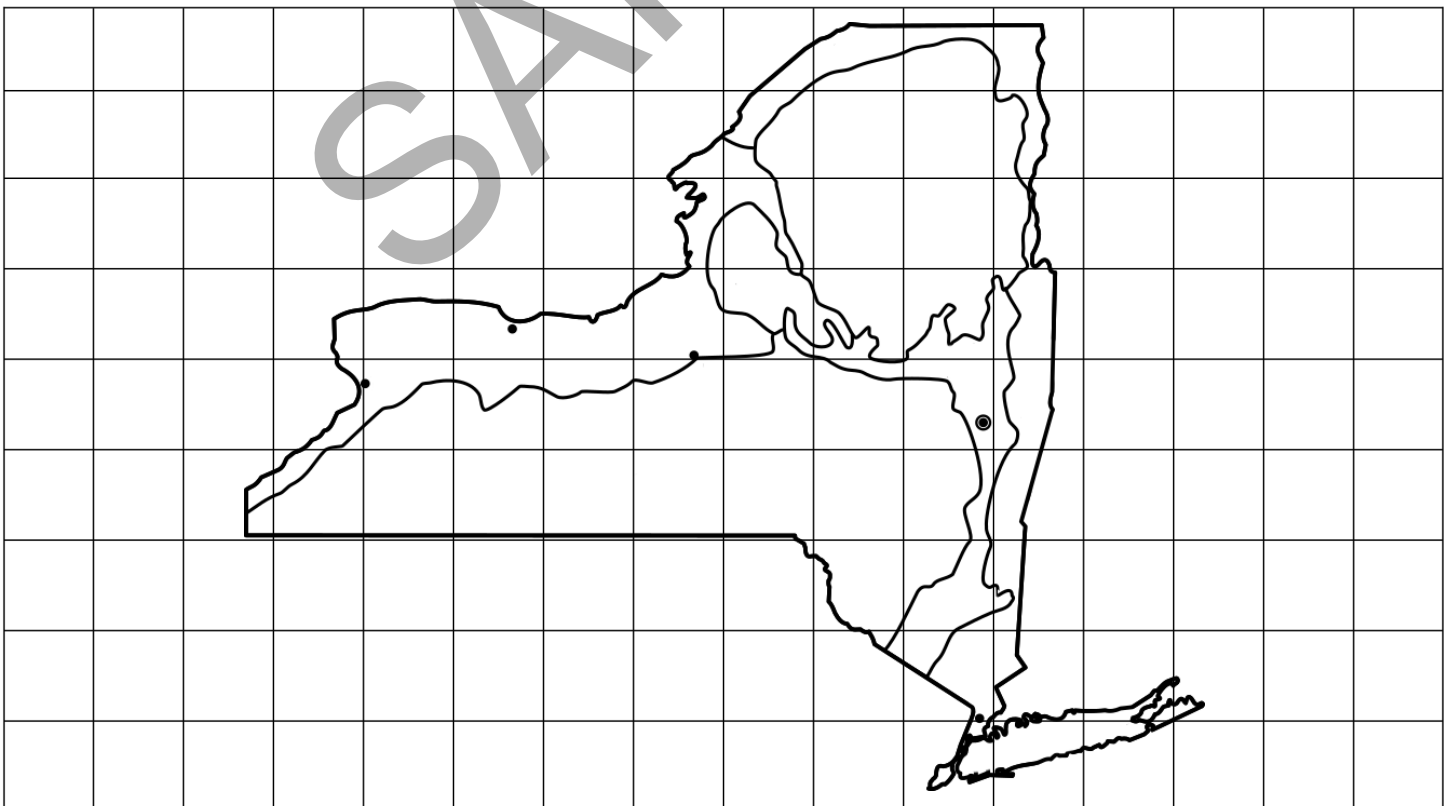
There are eight main regions in New York:

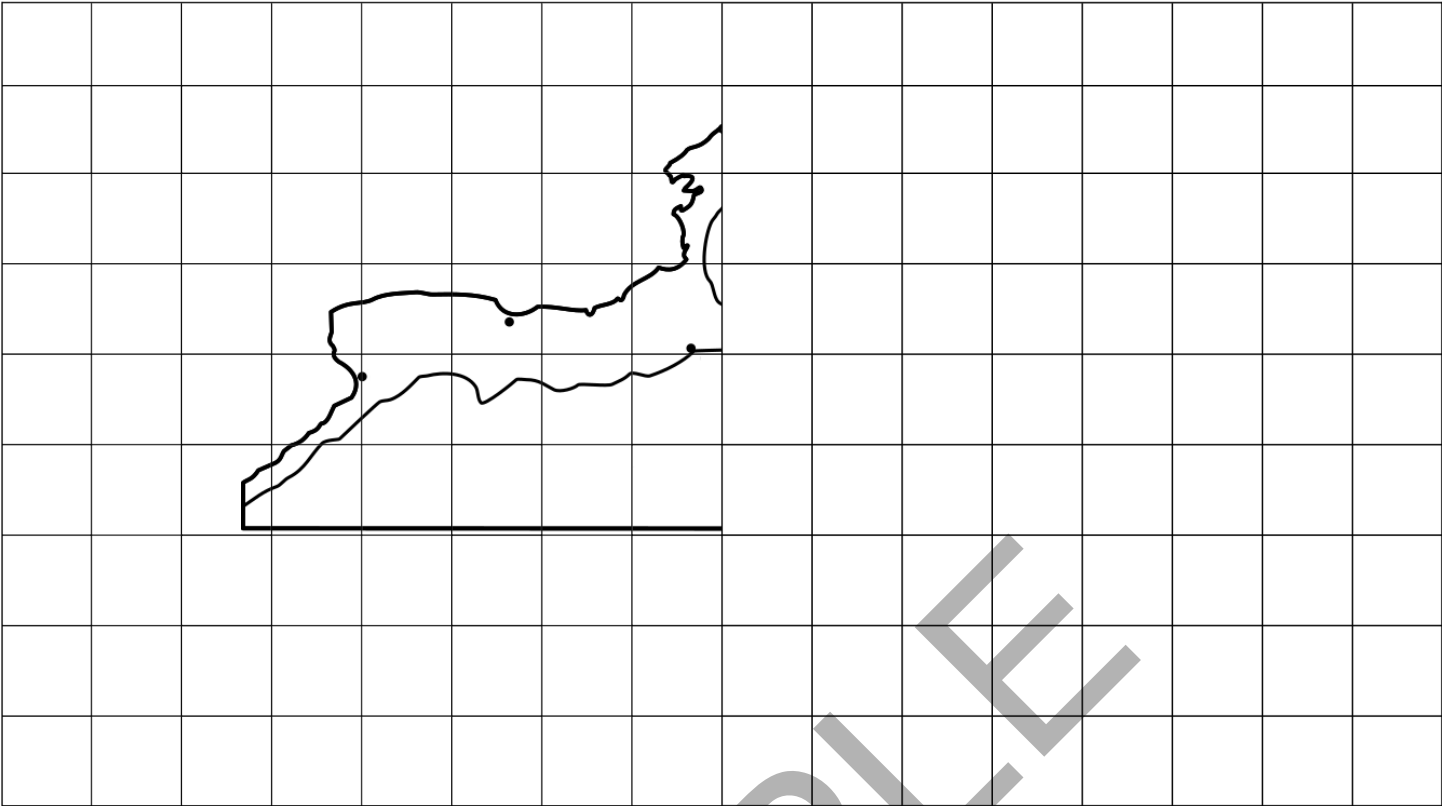
1. the Atlantic Coastal Plain
2. the New England Uplands
3. the Tug Hill Plateau
4. the Erie-Ontario Lowlands
5. the Hudson-Mohawk Lowlands
6. the Adirondack Upland
7. the St. Lawrence Lowlands
8. the Appalachian Plateau

Two of the major rivers in New York are the Hudson River and the Mohawk River. The Oswego River, the Seneca River, the Susquehanna River, and the Genesee River are also important rivers in New York. The Delaware River forms part of the border between New York and Pennsylvania. The St. Lawrence River and the Niagara River form part of the border between New York and Canada.

Follow these instructions to draw a map of New York on the next page like the one shown below:

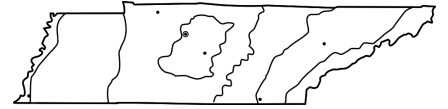
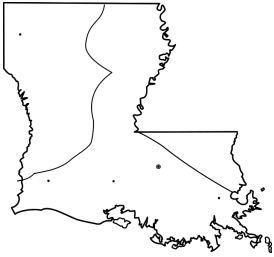
- Decide if you want to draw the right half of the picture or the left half of the picture and draw it in one of the first two grids. You can draw both if you'd like.
- Now, using a blank grid from the back of the book, try drawing the whole picture.



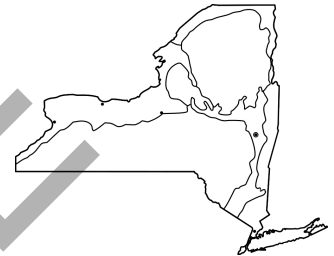


Identify the State Map

1. Which picture shows Tennessee? Circle it.



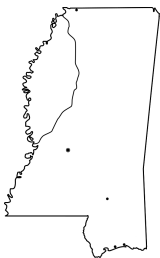
2. Which picture shows Rhode Island? Circle it.



3. Which picture shows Louisiana? Circle it.



4. Which picture shows Mississippi? Circle it.



5. Which picture shows Indiana? Circle it.



What State Am I?

1. I became the 13th state to join the Union on May 29, 1790. My capital is Providence. What state am I?

Ohio

Tennessee

Rhode Island

2. I became the 19th state to join the Union on December 11, 1816. My capital is Indianapolis. What state am I?

North Carolina

Indiana

Mississippi

3. I became the 16th state to join the Union on June 1, 1796. My capital is Nashville. What state am I?

Tennessee

New York

Vermont

4. I became the 20th state to join the Union on December 10, 1817. My capital is Jackson. What state am I?

Mississippi

Rhode Island

Kentucky

5. I became the 14th state to join the Union on March 4, 1791. My capital is Montpelier. What state am I?

Indiana

Vermont

New York

6. I became the 17th state to join the Union on March 1, 1803. My capital is Columbus. What state am I?

Tennessee

Kentucky

Ohio

7. I became the 11th state to join the Union on July 26, 1788. My capital is Albany. What state am I?

Vermont

New York

Louisiana

8. I became the 15th state to join the Union on June 1, 1792. My capital is Frankfort. What state am I?

Mississippi

North Carolina

Kentucky

9. I became the 18th state to join the Union on April 30, 1812. My capital is Baton Rouge. What state am I?

Louisiana

Ohio


Rhode Island

10. I became the 12th state to join the Union on November 21, 1789. My capital is Raleigh. What state am I?

North Carolina

Louisiana

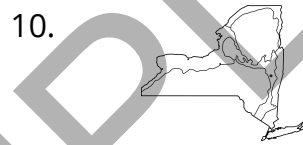
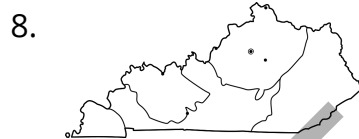
Indiana



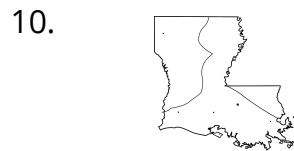
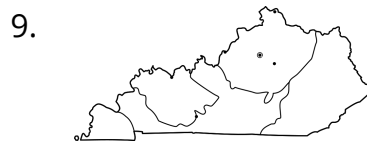
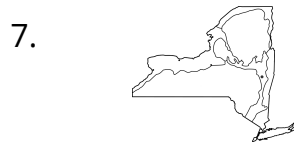
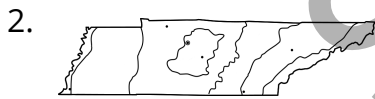
SAMPLE



Identify the State Map



Know the Capital



What State Am I?

1. Rhode Island
2. Indiana
3. Tennessee
4. Mississippi
5. Vermont
6. Ohio
7. New York
8. Kentucky
9. Louisiana
10. North Carolina

Do You Know My Rivers?

1. New York
2. Louisiana
3. Tennessee
4. Vermont
5. Mississippi
6. North Carolina
7. Kentucky
8. Ohio
9. Indiana
10. Rhode Island

Do You Know My Cities and Regions?

1. Kentucky
2. Ohio
3. Rhode Island
4. New York
5. Vermont
6. Indiana
7. North Carolina
8. Louisiana
9. Mississippi
10. Tennessee

Appendix: Maps

